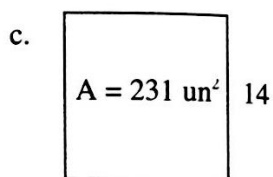
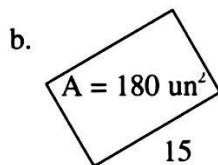
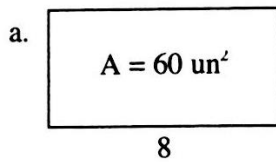


Name: \_\_\_\_\_

Period: \_\_\_\_\_

- 1-23. The area of each rectangle below is shown in the middle of the rectangle. For each figure, find the missing length or width.



- 1-24. Compute without a calculator.

a.  $427 - (-3)$

b.  $-50 + (-150)$